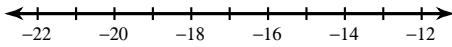


Solving and Graphing Inequalities in 1-variable

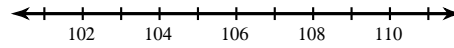
© 2013 Kuta Software LLC. All rights reserved.

Solve each inequality and graph its solution.

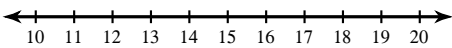
1) $20b \leq -320$



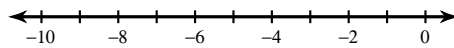
2) $9 > \frac{v}{12}$



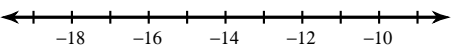
3) $102 > 7k - 10$



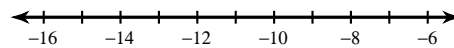
4) $60 > -10(p - 1)$



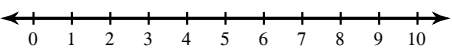
5) $80 \geq -10(x + 9)$



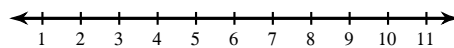
6) $130 \leq 4 - 9a$



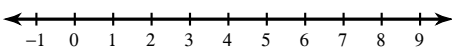
7) $93 < -3(5 - 6v)$



8) $-6n - 8(5n - 6) > -320$



9) $-7(2a + 8) - 2a > -152$



10) $-5(8 - 6b) > -220$

