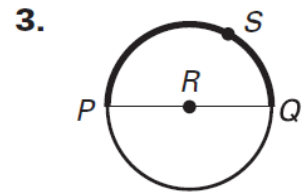
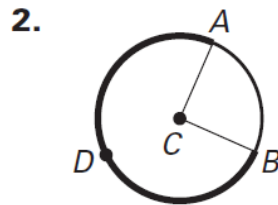
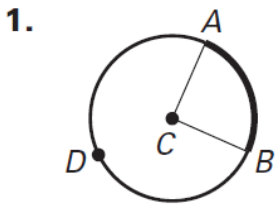


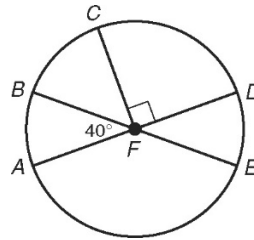
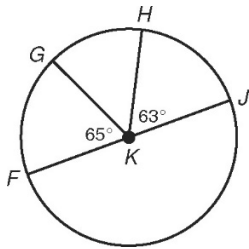
Name: _____ Date: _____

Central Angles Practice

Name the arc shown in bold.



Find each measure.

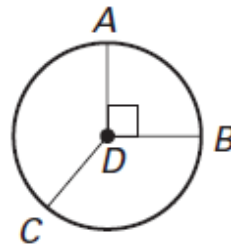
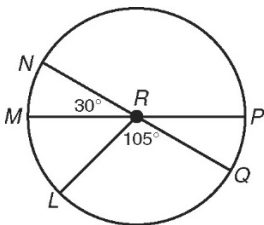


4. $m\angle HJ$ _____

6. $m\angle CDE$ _____

5. $m\angle FGH$ _____

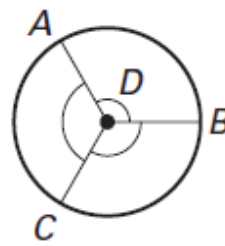
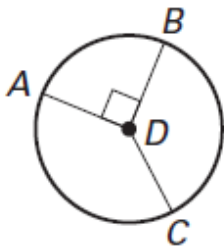
7. $m\angle BCD$ _____



8. $m\widehat{LMN}$ _____

10. $m\widehat{AB}$ _____

9. $m\widehat{LNP}$ _____



11. $m\widehat{ACB}$ _____

12. $m\widehat{CA}$ _____