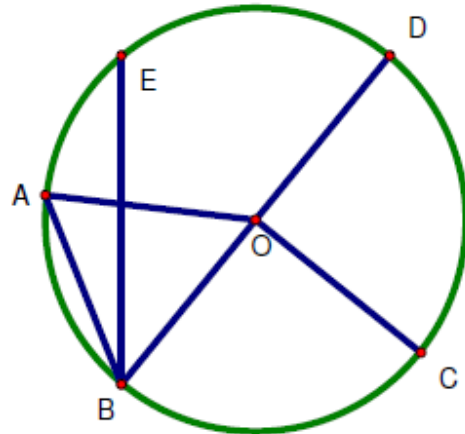


Name: _____ Date: _____

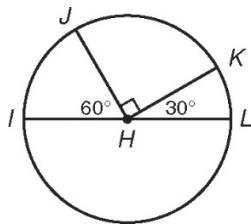
Central Angles Homework

1. Identify and name each of the following. Be sure to use the correct notation.

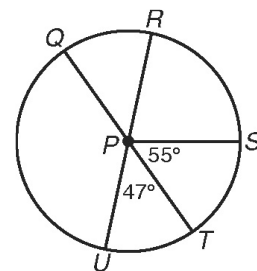
- a. Two different central angles
- b. A minor arc
- c. A major arc
- d. A semicircle
- e. Two different chords
- f. The central angle subtended by \widehat{AD}



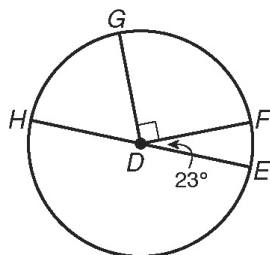
Find each measure.



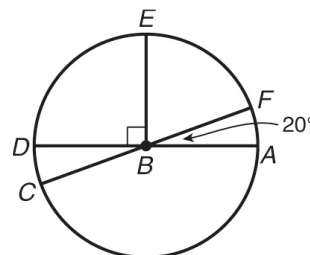
2. $m\widehat{LK}$ _____, $m\widehat{IK}$ _____



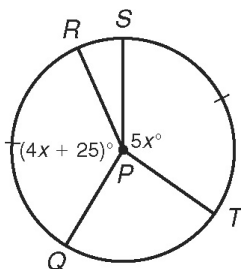
3. $m\widehat{QS}$ _____, $m\widehat{RQT}$ _____



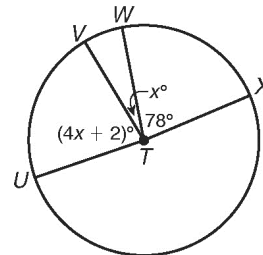
4. $m\widehat{HG}$ _____, $m\widehat{FEH}$ _____



5. $m\widehat{EF}$ _____, $m\widehat{CEA}$ _____



6. $\angle QPR$ _____



7. $\angle UTW$ _____, $m\widehat{UV}$ _____